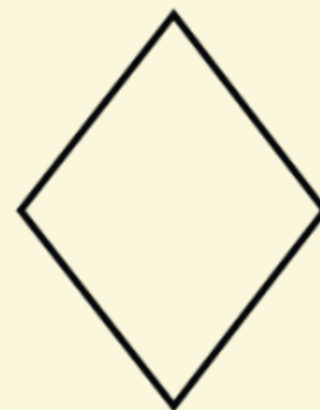
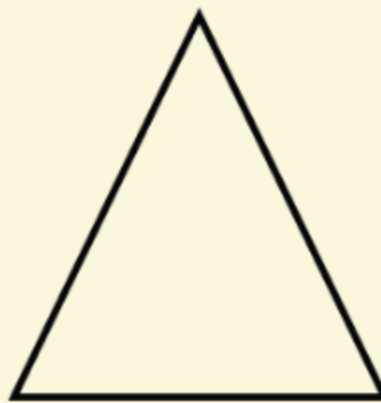

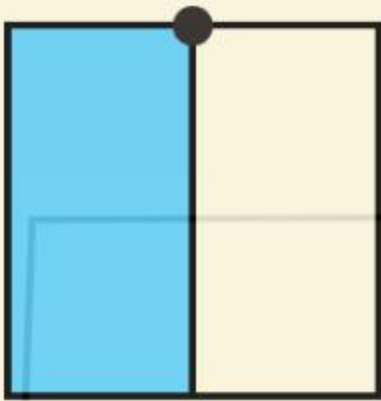


Look at the shapes. Discuss where you could draw a line to divide each shape in half. Then check on the next slide if you were correct. A half is two equal parts.



Were you right?

How many halves make a whole?



Now watch the clip then complete the  
halving sheet

Here is a picnic that Matt and Sarah are going to share equally. What will they each get?

