









Finding totals of 10p and 1p stacks

 <input type="text" value="44"/> p	 <input type="text"/> p
 <input type="text"/> p	 <input type="text"/> p
 <input type="text"/> p	 <input type="text"/> p
 <input type="text"/> p	 <input type="text"/> p
<input type="text" value="14"/> p	<input type="text" value="23"/> p

Write the total beside each amount. Draw coins to match the last two totals.



Use real coins to help you.



You have 7 coins. They make 34p. What coins are they?

