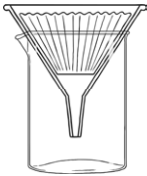
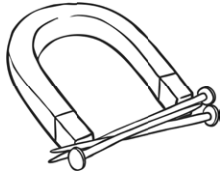




# Separating Mixtures

You have been asked to help the manager of a supermarket separate some mixed up materials. Draw a diagram showing how you separate each mixture. Complete the sentences to show which process you have used. Choose from these processes:

Filtration	Magnetic Attraction	Evaporation	Sieving
			
<p><b>Sand and Water.</b></p> <p>Diagram:</p> <p>To separate these materials I will use</p> <hr/>	<p>Diagram:</p>	<p><b>Paper Clips and Rice.</b></p> <p>Diagram:</p> <p>To separate these materials I will use</p> <hr/>	<p>Diagram:</p>
<p><b>Raisins and Flour.</b></p> <p>Diagram:</p> <p>To separate these materials I will use</p> <hr/>	<p>Diagram:</p>	<p><b>Salt and Water.</b></p> <p>Diagram:</p> <p>To separate these materials I will use</p> <hr/>	<p>Diagram:</p>