


1 Write in the missing digits.



4		4
---	--	---

 +


3	8	
---	---	--

 =

8	5	1
---	---	---

1 mark

2 Amir has three parcels.
Parcels A and B together weigh the same as parcel C.



The three parcels weigh 800 grams altogether.

Parcel A weighs 250g.

How much does parcel B weigh?



Show your **working**.
You may get a mark.

9

2 marks

3 Nadia is working with **whole** numbers.

She says,

'If you add a two-digit number to a two digit number you cannot get a four-digit number'.

Is she correct? Circle Yes or No.

Handwritten mark

Yes / No

Explain why.

Handwritten mark

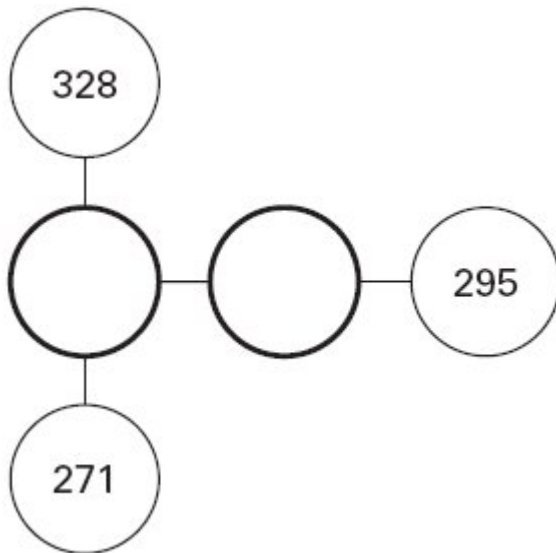
.....
.....
.....

1 mark

4 The three numbers on **each line** add up to **763**

Write in the missing numbers.

Handwritten mark



1 mark

5

Liam has two different sizes of rectangle.



He makes this pattern with them.



Not actual size

Calculate the lengths of A and B.

Handwritten mark A = cm

1 mark

Handwritten mark B = cm

1 mark

6

3054 - 817 - 44 =

1 mark

7

Write in what the missing numbers could be.

Handwritten mark

170 + = 220 -

1 mark



Mina has **5 more** marbles than Kirsty.

Kirsty has **2 more** marbles than Seb.

Altogether they have **30** marbles.

How many marbles does each child have?

Show your method

Mina	Kirsty	Seb
------	--------	-----

A large grid for showing the solution method. The grid is 20 units wide and 15 units high. A callout box on the left side of the grid contains the text "Show your method". At the bottom of the grid, there are three rectangular boxes labeled "Mina", "Kirsty", and "Seb" from left to right, each spanning 5 grid units in width.

2 marks

9

A shop sells notebooks and pens.



Hassan bought **a notebook** and **a pen**.

He paid **£1.10**

Kate bought **a notebook** and **2 pens**.

She paid **£1.45**

Calculate the cost of **a notebook**.

Show your method

<div style="border: 2px solid black; width: 150px; height: 30px; display: inline-block;"></div>	
---	--

2 marks