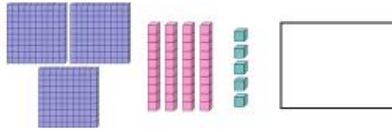


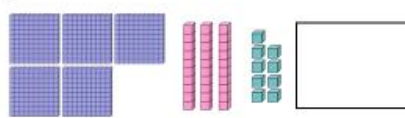
Place Value Worksheet 1

What numbers are represented by the base ten blocks below?

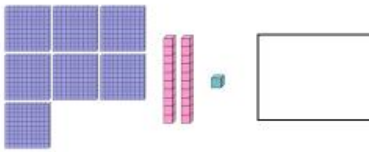
1.



4.




2.



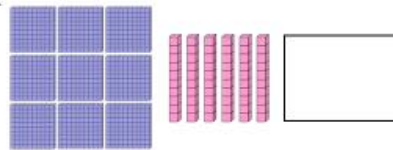
5.



3.



6.



Copyright 2020 Online Teaching Resources Ltd

Place Value Worksheet 6

Answer the questions below. The first one has been done for you.

Hundreds	Tens	Ones
1	5	7
	50	

What is the value of the 5 in this number?

Hundreds	Tens	Ones
8	4	2

What is the value of the 8 in this number?

Hundreds	Tens	Ones
6	1	9

What is the value of the 9 in this number?

Hundreds	Tens	Ones
3	2	4

What is the value of the 3 in this number?

Hundreds	Tens	Ones
5	8	6

What is the value of the 8 in this number?

Hundreds	Tens	Ones
9	0	3

What is the value of the 9 in this number?

Hundreds	Tens	Ones
2	1	9

What is the value of the 1 in this number?

Hundreds	Tens	Ones
4	7	5

What is the value of the 5 in this number?

Hundreds	Tens	Ones
7	6	8

What is the value of the 7 in this number?

Copyright 2020 Online Teaching Resources Ltd